
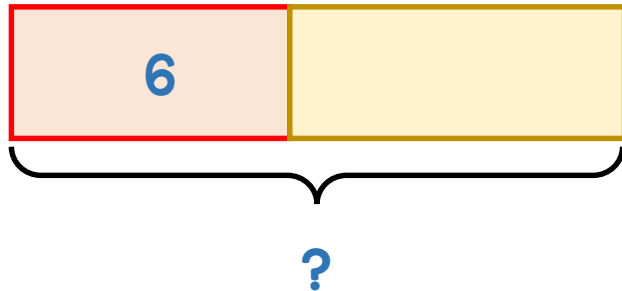


1 Mo has 6 toy cars.



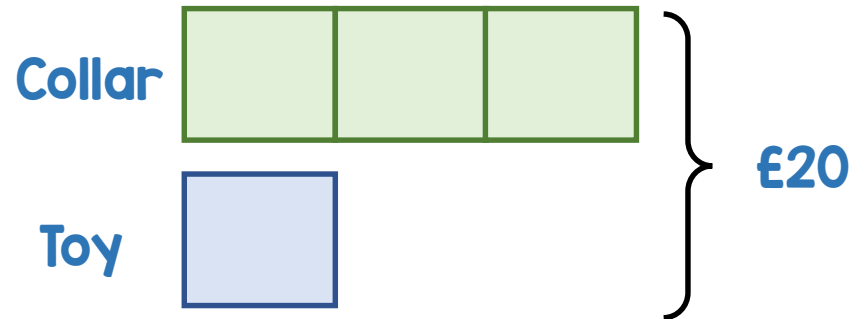
Annie has 8 toy cars.  
How many toy cars do they  
have altogether?



2 A dog collar costs 3 times as  
much as a toy.

The total cost of the collar and  
the toy is £20

How much does the collar cost?

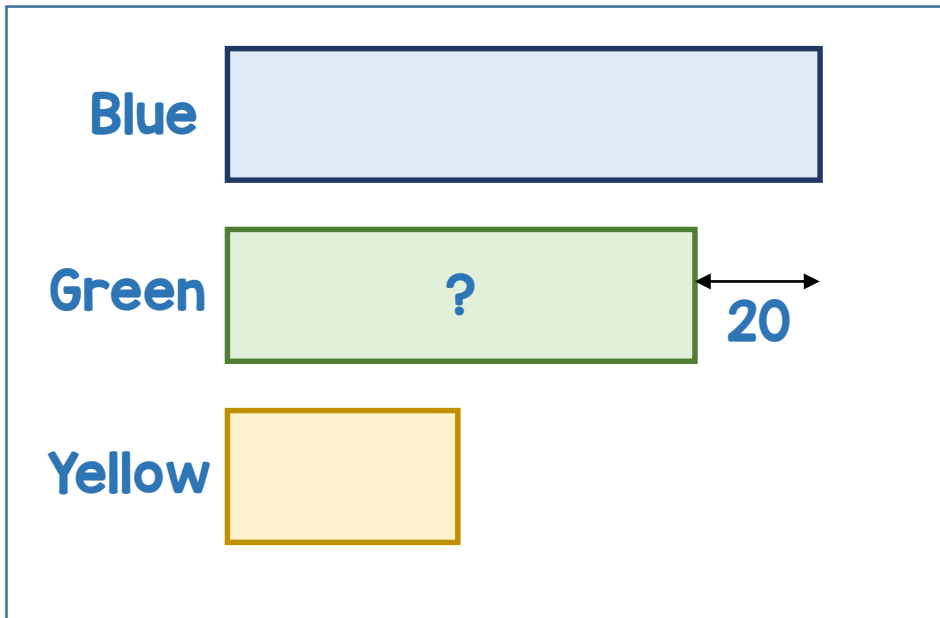


3

There are some counters in a box.

- There are 20 more blue counters than green counters.
- There are half as many yellow counters as green counters.
- There are 415 counters in total.

How many green counters are there?



4

The price of a washing machine increases by  $\frac{1}{3}$

The cost of the washing machine is now £284

How much did the washing machine cost before the increase?

